

NAME _____

#3

Show necessary work

① GCF = (18, 24)
LCM = _____

② Circle the fraction closest to 40%, cross out the one farthest away.

$\frac{1}{3}, \frac{1}{2}, \frac{1}{5}, \frac{1}{4}$

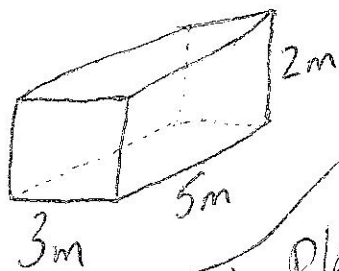
③ Circle all the numbers that fall between 0 and 1.

83%, $\frac{5}{4}$, 1.005, $\frac{7}{7}$, 0.351

④ 8% of 200? _____

⑤ What is the surface area of 3 of these?

⑥ $\frac{3}{8}$ yd. = _____ inches




⑦ $\frac{3}{8}$ of 36? _____

⑧ How many $4\frac{1}{2}$ baseball games can be played in 36 days? _____

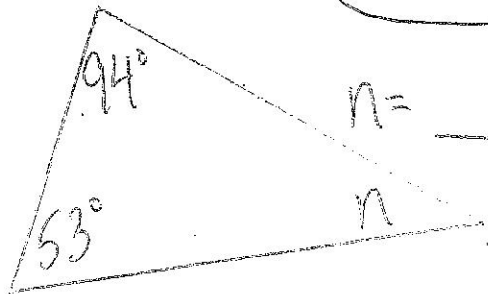
⑨ $n^3 + 3$; $n = 3$

⑩



$n =$ _____

⑪



$n =$ _____

$n =$ _____

⑫ test scores: 60, 70, 50, _____

mean = 67.5 what is missing score?